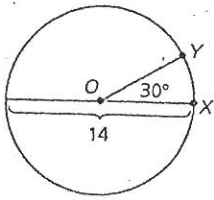


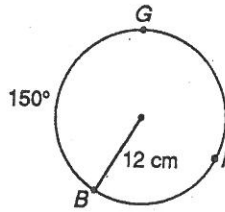
11.3

#22-25, find the indicated measure.

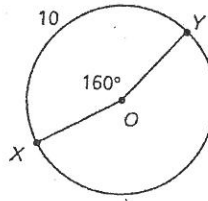
22. Length of \widehat{XY}



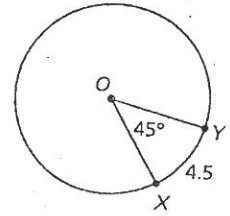
23. Length of \widehat{BIG} is $-\text{?}-$.



24. Radius

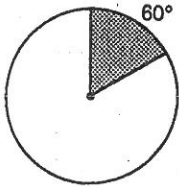


25. Circumference

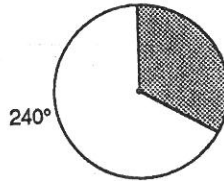


#26-28, Find the area of the shaded region.

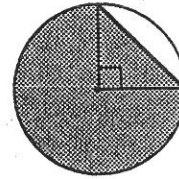
26. $r = 6$



27. $r = 8$

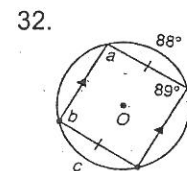
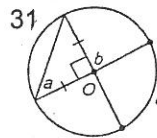
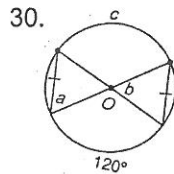
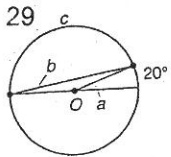


28. $r = 8$

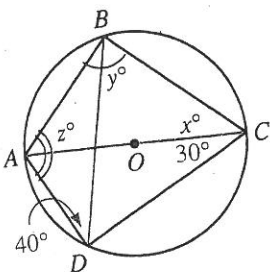


11.4

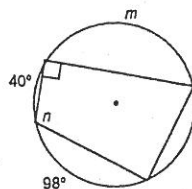
#29-33, Find the measure of a , b and c .



33. $X =$
 $Y =$
 $Z =$



34. $m = -\text{?}-$
 $n = -\text{?}-$



35. Quadrilateral $ABCD$ is circumscribed about circle O .
 $BX = 13$ $CD = 12$
What is the perimeter of $ABCD$?

